

<p>Spelling</p>	<p>Play the spelling tile games on spelling frame based on these words. https://spellingframe.co.uk/spelling-rule/23/20-Possessive-apostrophe-with-plural-words</p> <p style="text-align: center;">Possessive apostrophe with plural words</p> <p style="text-align: center;">girls' boys' babies' children's men's dogs' parents' people's rabbits' women's</p>
<p>English</p>	<p><u>Mondays answers.</u></p> <ol style="list-style-type: none"> 1. The dragons' roars filled the air as they all flew through the sky. (Noun: dragon) 2. During the flight, the pilots' suitcases were stored in the hold. (Noun: pilot) 3. In Autumn, the trees' leaves change colour as the weather becomes colder. (Noun: tree) 4. In the kitchen, the chef prepared the guests' meals. (Noun: guest) 5. The boys' football kits were all hung up in the changing room. (Noun: boy) 6. Everybody ate lots of cake at the children's party. (Noun: child) 7. The horses' hair was washed and brushed ready for the pageant. (Noun: horse) 8. At night, the friendly ghosts' wails echoed through the haunted house. (Noun: ghost) 9. The sheep's wool was used to make lots of different items of clothing. (Noun: sheep) 10. The giraffes' necks craned upwards to reach the juicy leaves. (Noun: giraffe) <p><u>Today's learning –</u> Look at the table below. Each box contains an apostrophe to show possession. You must decide if the possession in each case is by a singular or plural noun and write them into your book under these headings.</p>


The Queen's tarts	monsters' fur	dog's paws	wolves' howls
fairies' wings	pigs' trotters	sun's rays	passengers' suitcases
castle's turrets	babies' milk bottles	flowers' petals	witch's broomsticks
trees' leaves	the kings' jewels	girl's slippers	teacher's notebook
children's work	horse's hooves	footballers' shoes	cat's claws
clock's hands	lion's mane	pizzas' toppings	elephants' tusks

Maths

Monday's answers

Making the whole

1 Here are some counters.




a) What fraction of the counters are yellow? $\frac{3}{5}$

b) What fraction of the counters are red? $\frac{2}{5}$

c) Complete the number sentence. $\frac{3}{5} + \frac{2}{5} = \frac{5}{5}$

2 Here is a tower of cubes.



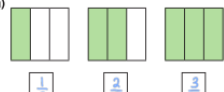
a) What fraction of the tower is green? $\frac{2}{4}$

b) What fraction of the tower is blue? $\frac{2}{4}$

c) Complete the number sentence. $\frac{2}{4} + \frac{2}{4} = \frac{4}{4}$

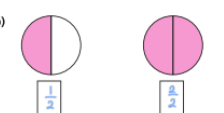
3 What fraction of each shape is shaded?
Which fraction represents a whole?
Fill in the missing fractions.

a)



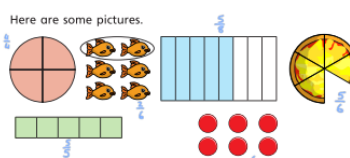
$\frac{1}{3}$ $\frac{2}{3}$ $\frac{3}{3}$ = one whole

b)



$\frac{1}{2}$ $\frac{2}{2}$ = one whole

4 Here are some pictures.



Use the pictures to help you answer the questions.

a) Write three fractions that are less than one whole.

$\frac{2}{4}$ $\frac{2}{5}$ $\frac{1}{4}$

WALT make a whole.

b) Write three fractions that are equal to one whole.

What do you notice? Talk about it with a partner.

5 Choose a phrase to complete the sentences.

greater than less than equal to

When the numerator is _____ the denominator, the fraction is less than one whole.

When the numerator is _____ the denominator, the fraction is equal to one whole.

6 Circle the fractions that are equivalent to one whole

$\frac{3}{5}$ $\frac{4}{4}$ $\frac{6}{10}$ $\frac{2}{2}$
 $\frac{10}{10}$ $\frac{8}{9}$ $\frac{3}{3}$ $\frac{5}{5}$

7 Here are $\frac{1}{3}$ of Jack's marbles.

Draw the rest of Jack's marbles in the bar model.

8 $\frac{2}{7}$ of a group of children are girls.

What fraction are boys?

are boys.

9 Each bar model is worth one whole.

Split the bar model and label the missing fractions.

$\frac{1}{4}$
 $\frac{1}{5}$ $\frac{1}{5}$
 $\frac{7}{10}$

10 Complete the number sentences.

a) $\frac{3}{5} + \square = 1$ c) $\square = \frac{2}{7} + \frac{5}{7}$
b) $\square + \frac{4}{10} = 1$ d) $\frac{9}{9} = \square + \frac{5}{9}$

Olympics cross curricular learning

Please click on the Virtual Sports Week Olympics Blog to complete the PE and Science activity. Please email your results and photos to poppepaulolympics@poppepaul.herts.sch.uk



**Virtual Sports Week:
Olympics Edition**
Monday 29TH June to Friday 3RD July



Monday 29th	Tuesday 30th	Wednesday 1st	Thursday 2nd	Friday 3rd
Standing Long Jump	Speed Bounce	Vertical Wall Jump	Target Throw	Shuttle Runs
Science	English	DT	Geography	Art



Thursday is our FANCY DRESS day! Do your activity in fancy dress and then email your teacher a photo if possible.

